




NAME _____

DATE _____


COUNTING NUMBERS IN GROUPS

Explore a situation with more than 9 groups of ten.

1. Rings kept in bowls of 10. There are 19 bowls. How many rings are there in all? Explain your answer using words, pictures or numbers.



= ____ tens.




= ____ tens.

= ____ tens + ____ tens.

= ____ + ____ = ____.

There are ____ rings in all.

2. A bunch of grapes are 10. There are 17 bunches of the same. How many grapes are there in all? Explain your answer using words, pictures or numbers.



= ____ tens.



= ____ tens.

= ____ tens + ____ tens.

= ____ + ____ = ____.

There are ____ grapes in all.